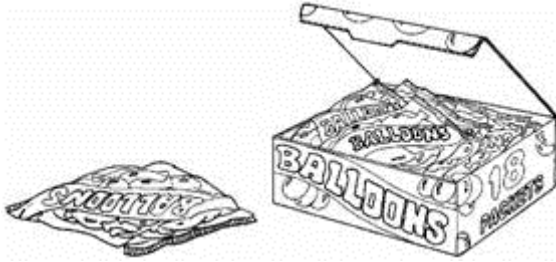


Name _____ Date 1.5.15

Mr. Cooke Homework

Q1. There are **5 balloons** in a **packet**.

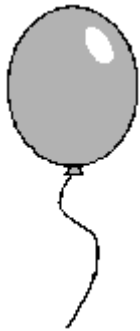
There are **18 packets** in a **box**.



How many balloons are there altogether in a **box**?

1 mark

There are **5 balloons** in a **packet**.



Kofi needs **65 balloons**.

How many **packets** does he need?

1 mark

Q2. Ben saved **twenty-four** 10p coins and **ten** 20p coins.

How much money has Ben saved?



Show your **working**.
You may get a mark

£

2 marks

Q3. Plants are sold in trays of **20**



Ivana buys **7 trays** of plants.

How many plants is this?



1 mark

David wants **240 plants**.

How many trays does he need to buy?



1 mark

Q4. A shop sells postcards in **packs of 6** and **packs of 8**.



Alan bought **4 packs of 8 cards**.

How many cards did he get?



1 mark

Shereen bought some **packs of 6 cards**.

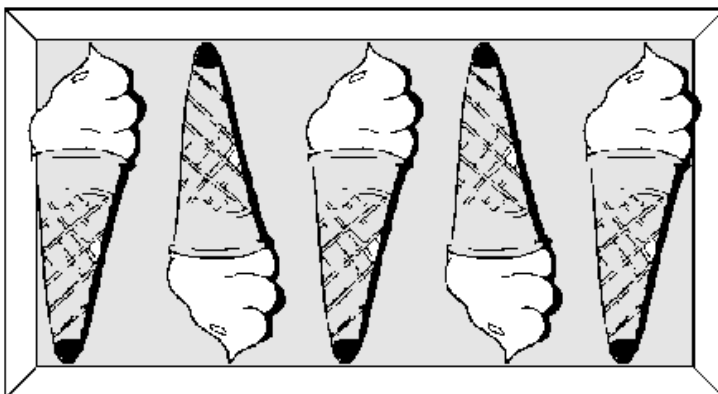
Altogether she has **30 cards**.

How many **packs of 6** did she buy?



1 mark

Q5. There are 5 ice-creams in a box.



Alex buys 7 boxes of ice-creams.

How many ice-creams does she buy altogether?



1 mark

Q6.




102 People came to the sale and paid 15p each to go in.

(a) How much money was collected at the entrance?

1 mark

Each car had to pay £7 to be at the sale.




The school collected £399 from the cars.

(b) How many cars were there?

1 mark


Q7. Apples are sold in packets of 4 at the supermarket.



How many apples are in 72 packs?

1 mark

Q8 Beth sells comics.



Magna	costs	25p
Pop	costs	14p
Signa	costs	16p
Mindy	costs	19p

Ali buys one Magna and one Mindy. He gives Beth 50p.

How much change will he get?




1 mark


Q9



215 people go to the sale.
It costs 15p each to go in.

Work out how much they pay altogether.



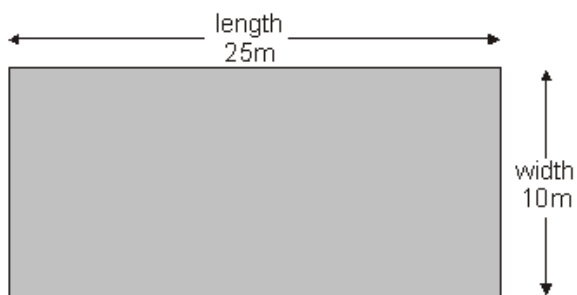
Show your **working**.
You may get a mark 

2 marks

Q10.



A rectangular swimming pool is 25 metres long and 10 metres wide.



David swims **5 lengths**.

Rosie swims **12 widths**.

How much **further** does David swim than Rosie?




Show
your **working**.
You may get
a mark

metres

2 marks

Q11. Forest School sells badges for charity.



For each badge sold, **£1.20** is given to a charity.

How much does the charity get when **12** badges are sold?


£

1 mark

If the charity got **£24**, how many badges were sold?

1 mark

Q12.



In a supermarket storeroom there are

7 boxes of tomato soup

5 boxes of pea soup

4 boxes of chicken soup

There are **24 tins** in every **box**. How many **tins** of soup are there **altogether**?

Show your **working**.
You may get a mark

2 marks

Q13. Asim and Mike both buy **12** cans of lemonade.



pack of 4 cans
£1.20

Asim buys 3 packs of 4 cans.



pack of 6 cans
£1.70

Mike buys 2 packs of 6 cans.

Mike says to Asim,


'You paid 50p more than me'.

Is Mike correct?

Circle **Yes** or **No**.

 Yes / No

Explain how you know.



.....

.....

1 mark


Q14.



185 people go to the school concert.

They pay **£1.35** each.

How much ticket money is collected?



1 mark

Programmes cost **15p** each.

Selling programmes raises **£12.30**

How many **programmes** are sold?



2 marks

Q15.



Some children go camping.
It costs **£2.20** for each child to camp each night.
They go for **6** nights.

How much will **each child** have to pay for the **6** nights?

2 marks

There are **70** children.
Each tent takes up to **6** children.

What is the **least number of tents** they will need?

2 marks